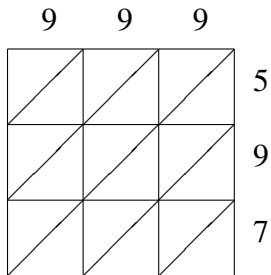
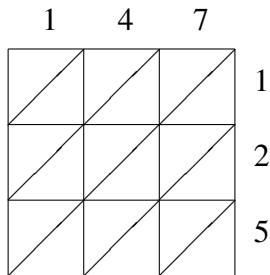


Lattice Multiplication

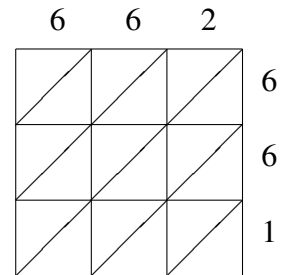
Use lattice multiplication to find each product.



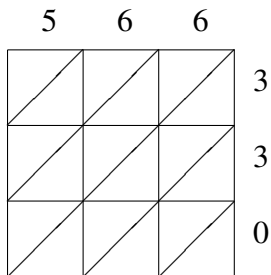
$999 \times 597 = \underline{\hspace{2cm}}$



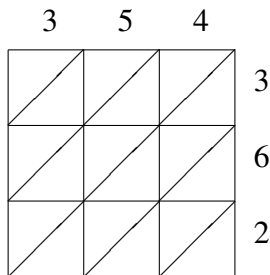
$147 \times 125 = \underline{\hspace{2cm}}$



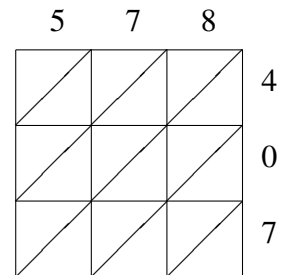
$662 \times 661 = \underline{\hspace{2cm}}$



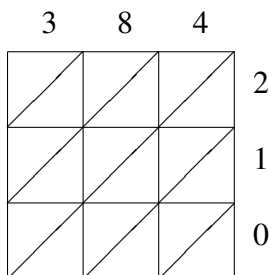
$566 \times 330 = \underline{\hspace{2cm}}$



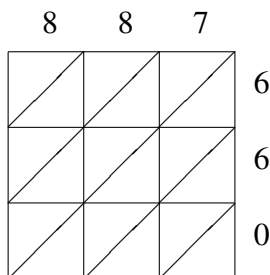
$354 \times 362 = \underline{\hspace{2cm}}$



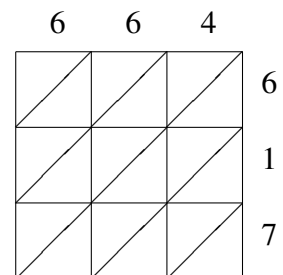
$578 \times 407 = \underline{\hspace{2cm}}$



$384 \times 210 = \underline{\hspace{2cm}}$



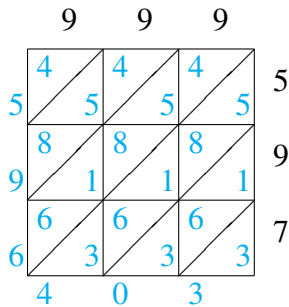
$887 \times 660 = \underline{\hspace{2cm}}$



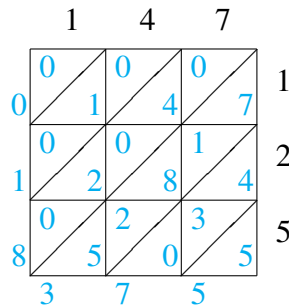
$664 \times 617 = \underline{\hspace{2cm}}$

Lattice Multiplication Answers

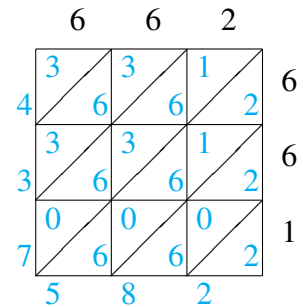
Use lattice multiplication to find each product.



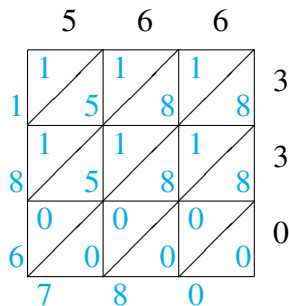
$$999 \times 597 = 596,403$$



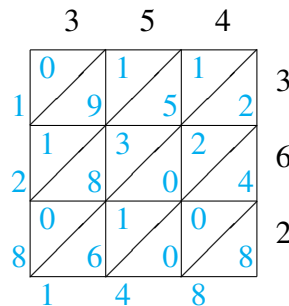
$$147 \times 125 = 18,375$$



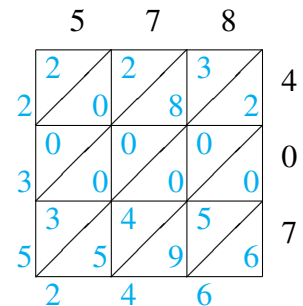
$$662 \times 661 = 437,582$$



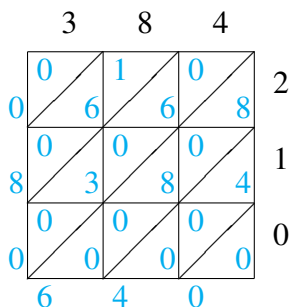
$$566 \times 330 = 186,780$$



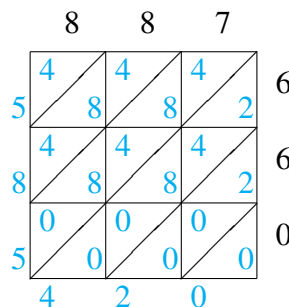
$$354 \times 362 = 128,148$$



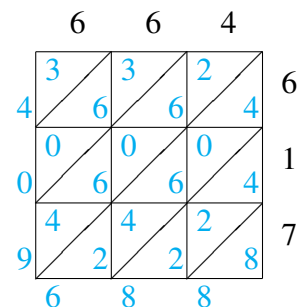
$$578 \times 407 = 235,246$$



$$384 \times 210 = 80,640$$



$$887 \times 660 = 585,420$$



$$664 \times 617 = 409,688$$