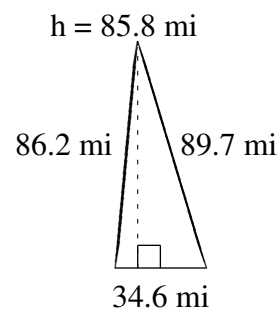
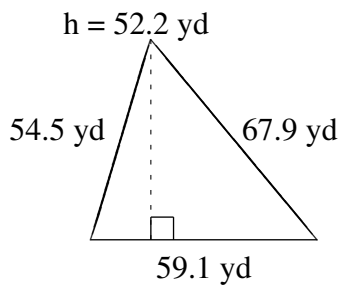
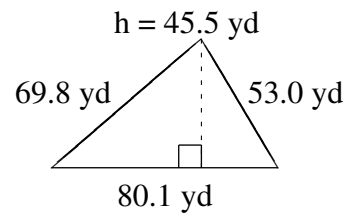
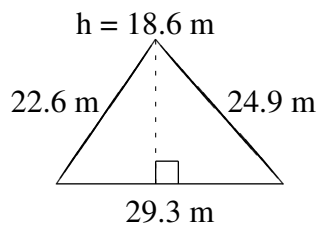
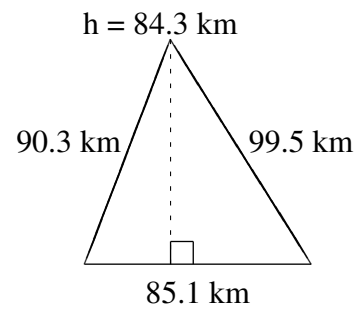
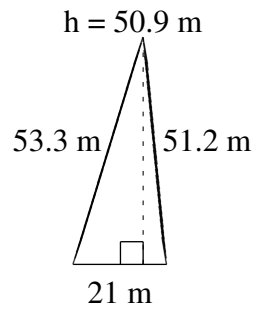


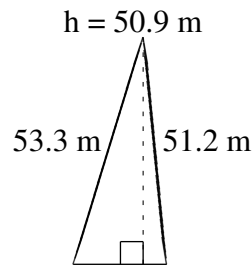
Area and Perimeter of Triangles

Find the area and perimeter of each triangle.



Area and Perimeter of Triangles Answers

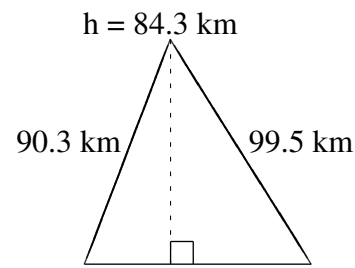
Find the area and perimeter of each triangle.



21 m

$$A = 534.45 \text{ m}^2$$

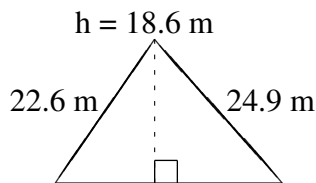
$$P = 125.5 \text{ m}$$



85.1 km

$$A = 3586.965 \text{ km}^2$$

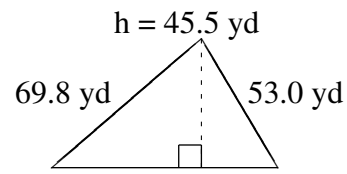
$$P = 274.9 \text{ km}$$



29.3 m

$$A = 272.49 \text{ m}^2$$

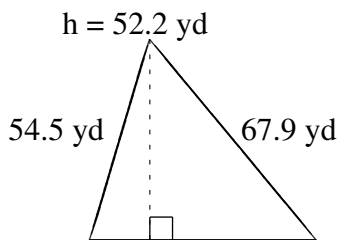
$$P = 76.8 \text{ m}$$



80.1 yd

$$A = 1822.275 \text{ yd}^2$$

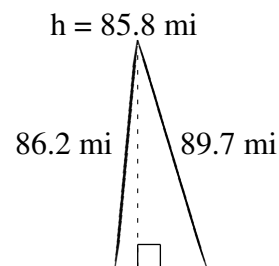
$$P = 202.9 \text{ yd}$$



59.1 yd

$$A = 1542.51 \text{ yd}^2$$

$$P = 181.5 \text{ yd}$$



34.6 mi

$$A = 1484.34 \text{ mi}^2$$

$$P = 210.5 \text{ mi}$$