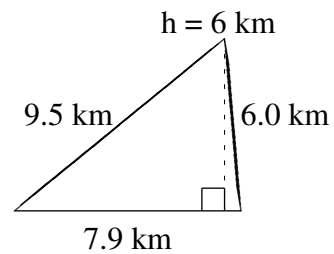
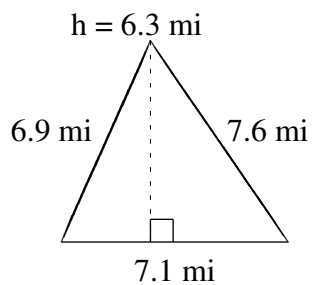
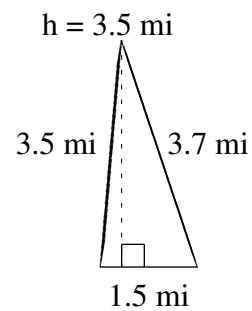
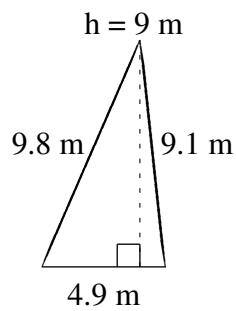
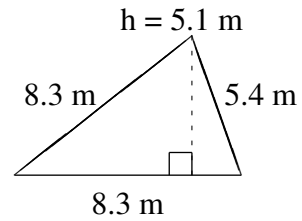
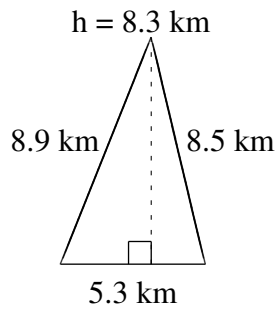


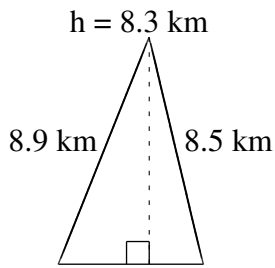
Area and Perimeter of Triangles

Find the area and perimeter of each triangle.

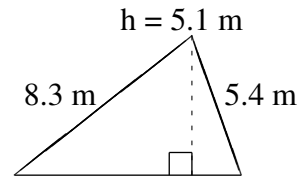


Area and Perimeter of Triangles Answers

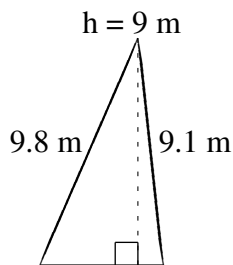
Find the area and perimeter of each triangle.



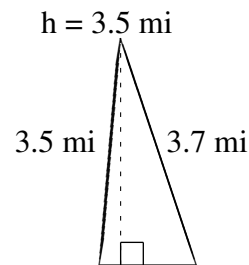
$$A = 21.995 \text{ km}^2$$
$$P = 22.7 \text{ km}$$



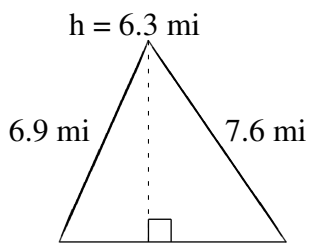
$$A = 21.165 \text{ m}^2$$
$$P = 22.0 \text{ m}$$



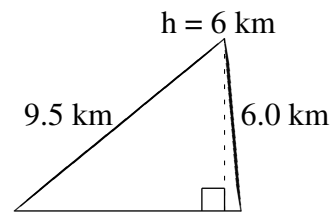
$$A = 22.05 \text{ m}^2$$
$$P = 23.8 \text{ m}$$



$$A = 2.625 \text{ mi}^2$$
$$P = 8.7 \text{ mi}$$



$$A = 22.365 \text{ mi}^2$$
$$P = 21.6 \text{ mi}$$



$$A = 23.7 \text{ km}^2$$
$$P = 23.4 \text{ km}$$