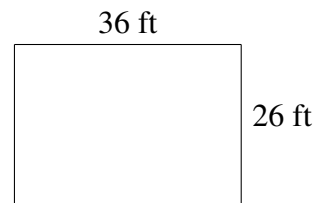

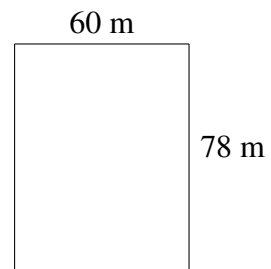
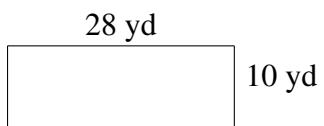
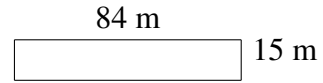
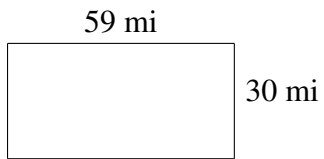


# Area and Perimeter of Rectangles

Find the area and perimeter of each rectangle.



# Area and Perimeter of Rectangles Answers

Find the area and perimeter of each rectangle.

