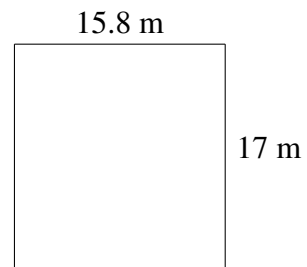
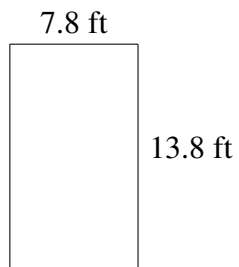
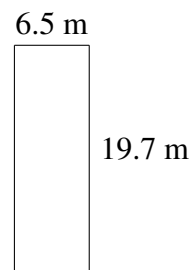
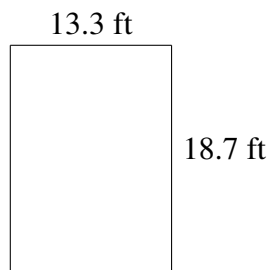
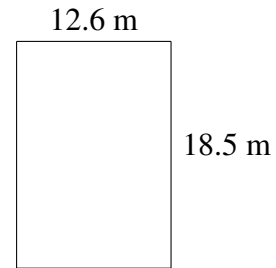
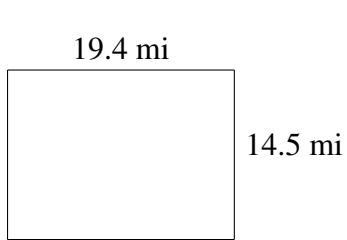


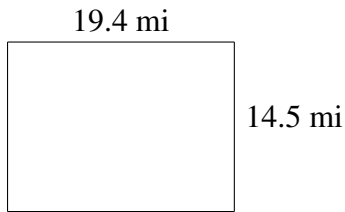
Area and Perimeter of Rectangles

Find the area and perimeter of each rectangle.

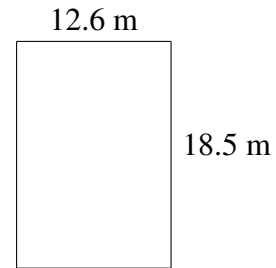


Area and Perimeter of Rectangles Answers

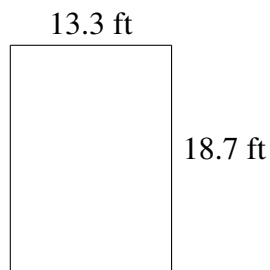
Find the area and perimeter of each rectangle.



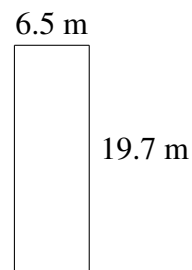
$$A = 281.30 \text{ mi}^2$$
$$P = 67.8 \text{ mi}$$



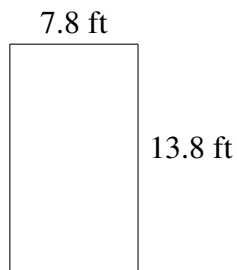
$$A = 233.10 \text{ m}^2$$
$$P = 62.2 \text{ m}$$



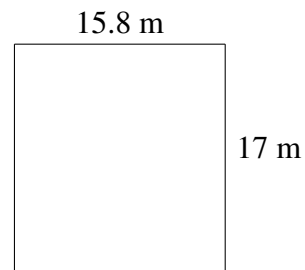
$$A = 248.71 \text{ ft}^2$$
$$P = 64.0 \text{ ft}$$



$$A = 128.05 \text{ m}^2$$
$$P = 52.4 \text{ m}$$



$$A = 107.64 \text{ ft}^2$$
$$P = 43.2 \text{ ft}$$



$$A = 268.6 \text{ m}^2$$
$$P = 65.6 \text{ m}$$