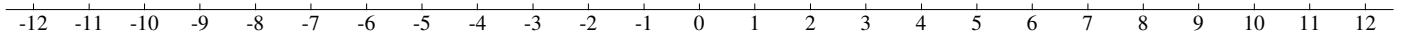
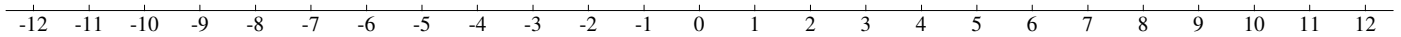

Ordering Integers

Instructions: Order each set of integers on the number line.

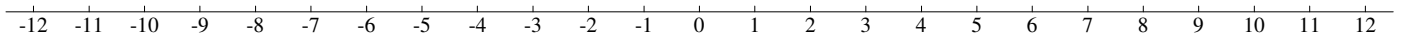
Set 1: 7, -10, -9, -7, 8, -3, -5, 3, -11, -1



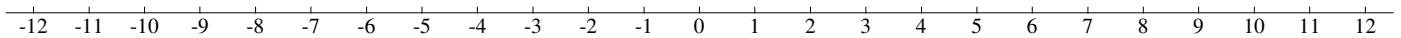
Set 2: -5, -6, 1, 1, 4, -8, -2, 7, -3, 6



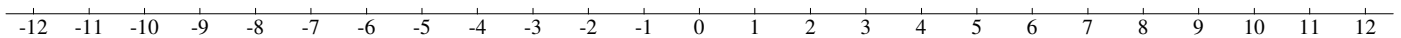
Set 3: -12, -8, -3, -3, 7, 1, 6, 7, 5, -10



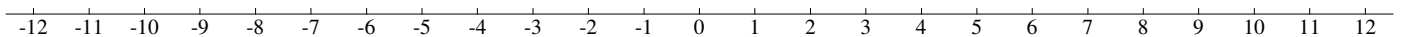
Set 4: 1, -2, 9, -9, 4, -4, 5, 12, -2, -1



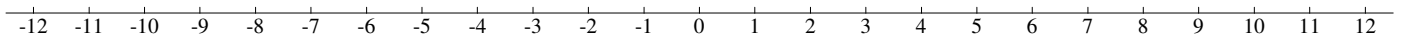
Set 5: 1, -5, -2, -5, 2, 2, -8, -2, -12, -7



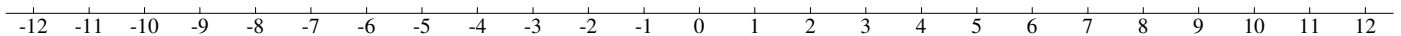
Set 6: 9, 8, 10, 4, -9, -7, -5, -1, -5, -12



Set 7: -3, 0, -9, -10, 4, -4, -6, -10, 0, -8



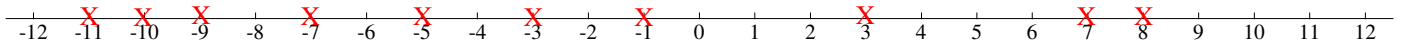
Set 8: 4, 11, -7, 9, 4, 0, -5, -2, 3, 9



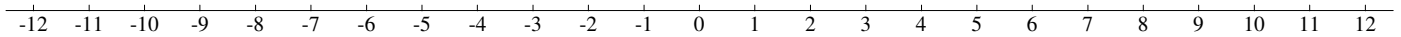
Ordering Integers Answers

Instructions: Order each set of integers on the number line.

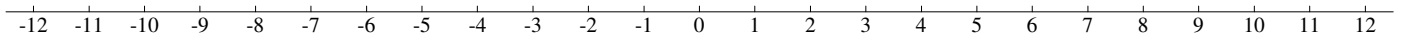
Set 1: 7, -10, -9, -7, 8, -3, -5, 3, -11, -1



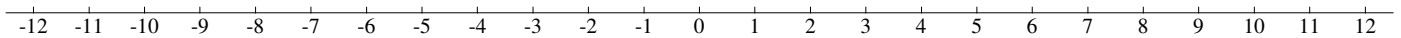
Set 2: -5, -6, 1, 1, 4, -8, -2, 7, -3, 6



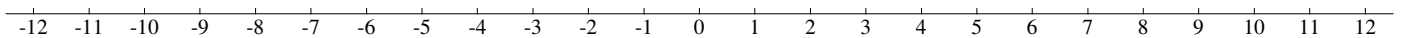
Set 3: -12, -8, -3, -3, 7, 1, 6, 7, 5, -10



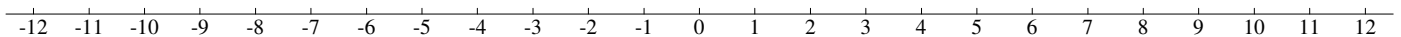
Set 4: 1, -2, 9, -9, 4, -4, 5, 12, -2, -1



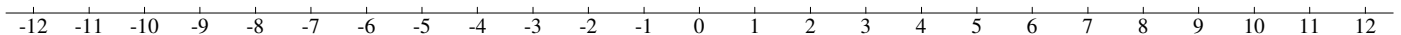
Set 5: 1, -5, -2, -5, 2, 2, -8, -2, -12, -7



Set 6: 9, 8, 10, 4, -9, -7, -5, -1, -5, -12



Set 7: -3, 0, -9, -10, 4, -4, -6, -10, 0, -8



Set 8: 4, 11, -7, 9, 4, 0, -5, -2, 3, 9

