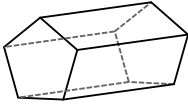
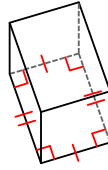


Identifying Three-Dimensional Figures

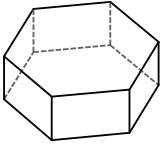
1)



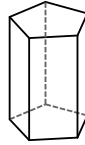
2)



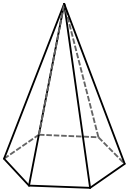
3)



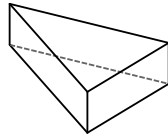
4)



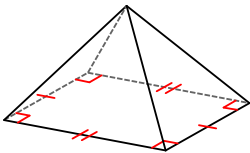
5)



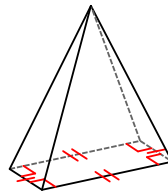
6)



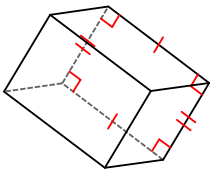
7)



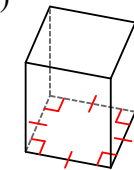
8)



9)

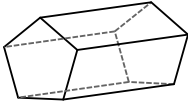


10)



Identifying Three-Dimensional Figures Answers

1)



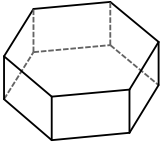
pentagonal prism

2)



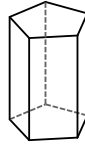
rectangular prism

3)



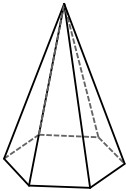
hexagonal prism

4)



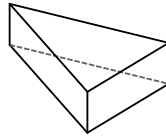
pentagonal prism

5)



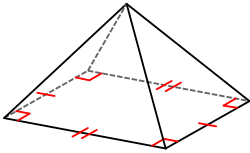
hexagonal pyramid

6)



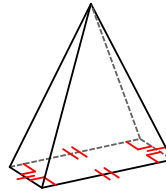
triangular prism

7)



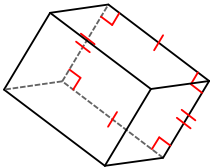
rectangular pyramid

8)



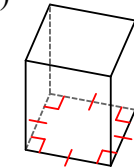
rectangular pyramid

9)



rectangular prism

10)



square prism