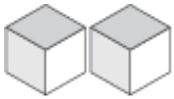


# Representing Numbers

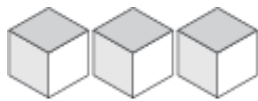
What number is shown with each group of base ten blocks?



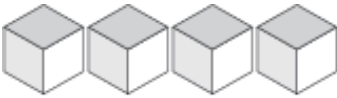
\_\_\_\_\_



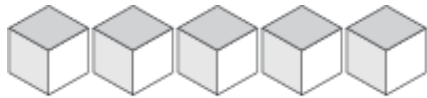
\_\_\_\_\_



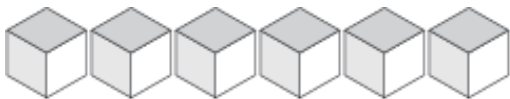
\_\_\_\_\_



\_\_\_\_\_



\_\_\_\_\_



\_\_\_\_\_



\_\_\_\_\_



\_\_\_\_\_



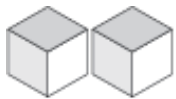
\_\_\_\_\_

# Representing Numbers Answers

What number is shown with each group of base ten blocks?



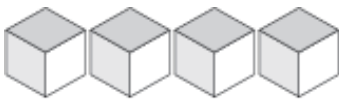
1



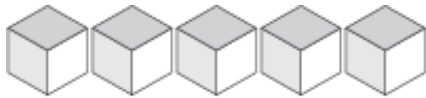
2



3



4



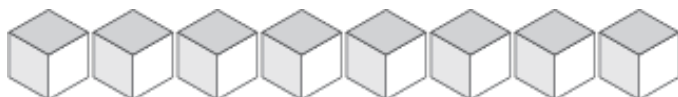
5



6



7



8



9